


Year 2

Please find today's learning tasks below.

The table below explains the tasks and you will find the resources underneath. Your child will know which challenge they usually access in each subject and which task will be appropriate for them.

Year group: 2		Date: 10.06.2020		
English	<p>The Bear who came to babysit is the story that we will focus on in our English work this week.</p> 			
	Bronze	Silver	Gold	
	<p>Today you are going to use super sentences to write a menu for the meals a bear might make. First talk about your favourite meals and how they might be described on a menu. E.g. delicious pasta strings wrapped in a juice tomatoes and beef sauce, topped with a sprinkle of grated cheese and served with crusty garlic bread. (This will help you when you try to describe the bear's meals.)</p> <p>You can use the outline below if you like or write your it into your book.</p>			
Maths	<p>Warm Up – follow this link to complete your maths warm up.</p> <p>https://www.ictgames.com/mobilePage/mostlyPostie/index.html</p> <p>This is a game about reading scales.</p>			
	Bronze	Silver	Gold	
	<p>Today you will be continuing to learn about mass. Today you will be reading scales in kg and g. Look at the powerpoint on the home learning website and then complete the activities below.</p>	<p>Today you will be continuing to learn about mass. Today you will be reading scales in kg and g. Look at the powerpoint on the home learning website and then complete the activities below.</p>	<p>Today you will be continuing to learn about mass. Today you will be reading scales in kg and g. Look at the powerpoint on the home learning website and then complete the activities below.</p>	
Reading	<p>Log in to Oxford Owls and choose a book that you would like to read.</p> <p>https://www.oxfordowl.co.uk/please-log-in?open_loginbox</p>			
Phonics/SPAG	<p>Complete the activity handwriting activity</p>			

Unless otherwise specified, please complete the tasks in either your home learning book or print out the document below.



The Bear's Menu

Plan a meal that the bear might cook.
Can you describe each course?

Starter

Main

Dessert



Homophones and Near Homophones

Practise your weekly spelling words using cursive handwriting.

there

their

they're

here

hear

see

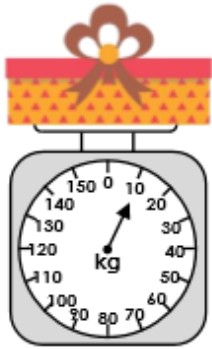
sea

to

too

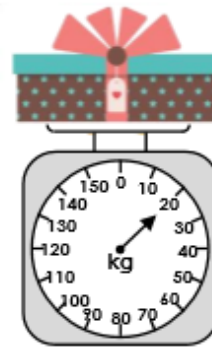
two

1a. What weight does the scale show?



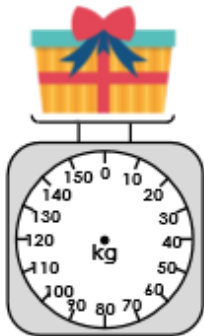
VF

1b. What weight does the scale show?



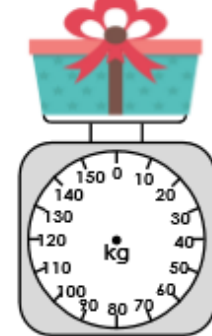
VF

2a. Add an arrow to the scale so that it shows 30kg.



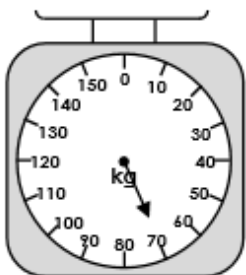
VF

2b. Add an arrow to the scale so that it shows 10kg.



VF

3a. Tick if the statement is true or false.



The scale reads heavier than 50g.

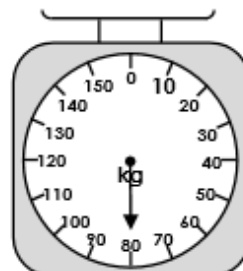
True

False



VF

3b. Tick if the statement is true or false.



The scale reads lighter than 90kg.


True

False




VF

5a. What weight does the scale show?



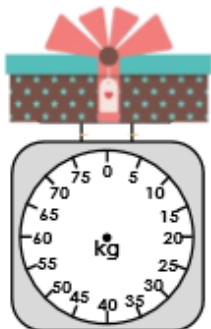
VF

5b. What weight does the scale show?




VF

6a. Add an arrow to the scale so that it shows 65kg.



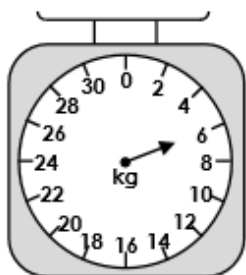
VF

6b. Add an arrow to the scale so that it shows 11kg.



VF

7a. Tick if the statement is true or false.



The scale reads lighter than 6kg.

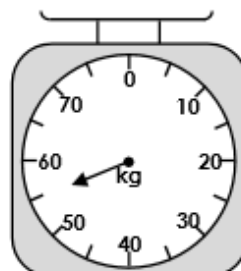
True

False



VF

7b. Tick if the statement is true or false.



The scale reads 55 kg.

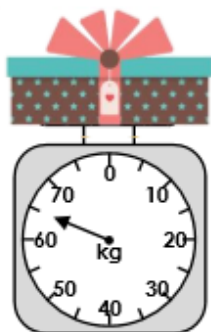
True

False



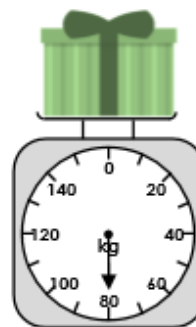
VF

9a. What weight does the scale show?



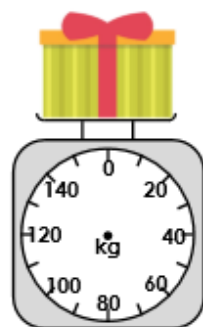
VF

9b. What weight does the scale show?




VF

10a. Add an arrow to the scale so that it shows 90kg.



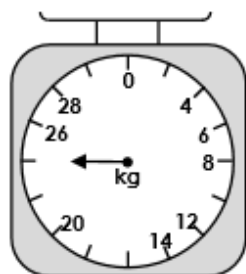
VF

10b. Add an arrow to the scale so that it shows 55kg.



VF

11a. Tick if the statement is true or false.



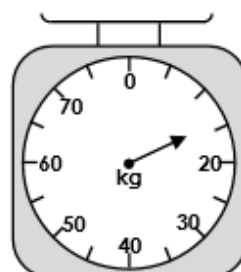
The scale reads 25kg.

<input type="checkbox"/>	True
<input type="checkbox"/>	False



VF

11b. Tick if the statement is true or false.



The scale reads 19 kg.

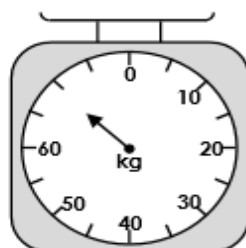
<input type="checkbox"/>	True
<input type="checkbox"/>	False



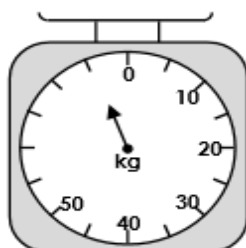
VF

12a. Circle the scale that shows 10kg less than 80kg.

A



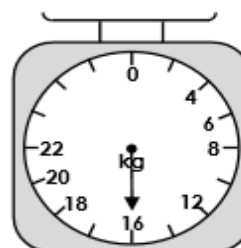
B



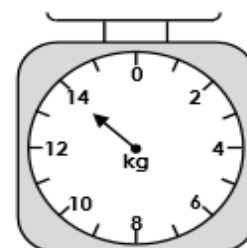
VF

12b. Circle the scale that shows 2kg more than 12kg.

A



B



VF