

Please find today's learning tasks below.

The table below explains the tasks and you will find the resources underneath. Your child will know which challenge they usually access in each subject and which task will be appropriate for them.

Unless otherwise specified, please complete the tasks in either your homework book or on a word document

Year group: 3		Date: 3 rd July	
	Bronze	Silver	Gold
English	60 second reads- Today we would like you to read the text 'A Space Adventure' then answer the questions. Remember to answer in full sentences.	60 second reads- Today we would like you to read the text 'Fun in the Sun for Heatwave Britain' then answer the questions. Remember to answer in full, detailed sentences.	60 second reads- Today we would like you to read the text 'Help!' then answer the questions. Remember to answer in full, detailed sentences.
Maths	Complete the mental maths sheet using all of the skills you have learned this year. Then complete at least 5 games of TTRockstars.		
Reading/ Spelling	Please follow the link below to access online reading books. Please see the list of books for your child's reading band in their red book. https://www.oxfordowl.co.uk/ Please read at least 2 pages of a book and record it in the red school links book. <i>Spelling test day! Ask your adult to read the questions out to you. Try your best to spell the words in your yellow book. We can't wait to hear your scores!</i>		

Bronze- Spellings

Spelling	Write	Write	Write
climb			
most			
only			
both			
pretty			

Silver/Gold- Spellings

Spelling	Write	Write	Write
guide			
heard			
heart			
height			
history			
increase			
knowledge			



A Space Adventure!

9 One day, Jacob and Oscar had a wonderful space
16 adventure! They climbed into their rocket and
26 shot off up into space. Jacob wanted to see aliens
34 and monsters. Oscar wanted to discover a new
35 planet.

44 After a bumpy journey, they landed on a rocky,
53 purple planet and they climbed out to start to
59 explore. Suddenly, Oscar saw some funny-looking
67 footsteps. Being very brave, the boys decided to
75 follow them. They walked and walked until they
83 noticed something green and furry behind a huge
89 space rock. What could it be?

97 Slowly, they walked up to take a peek...

Quick Questions



1. What did Jacob hope to see in space?



2. Which adjective has the author used to show that the boys didn't have an easy trip into space?

Why were the boys '*being very brave*'?





3. What do you think happened next?

Fun in the Sun for Heatwave Britain?

11 The UK is in the middle of one of the hottest
19 summers ever recorded, and some places haven't had
23 rain for 48 days!
31 For some people, the heatwave has been great
40 news. Beaches are packed, and ice cream sellers are
43 seeing record sales!
51 However, not everyone is happy. Many farmers are
59 hoping that the heatwave ends soon. Berries and
68 fruit are ripening too quickly, and grass has even
75 stopped growing in some places, causing problems
85 for farmers who need to feed their sheep and cows.
96 It's not just the UK which is feeling the heat. From
105 the Arctic to Africa, the weather is much hotter
107 than usual.



Quick Questions

1. Find a word which means full.

2. How are ice cream sellers feeling about the heat? Explain your answer.

3. Find two people who feel differently about the heatwave.

1. _____

2. _____

4. Summarise the main information from the newspaper article in 20 words or less.

Help!

10 The trees were like inky giants menacingly looming over
17 the house with twisted, reaching arms. Their decaying
25 leaves rustled loudly and the air smelled damp.

35 Lucy arrived at the door. Her chest tightened. Her eyes
44 widened. She lifted her shaking, clammy hand to knock
55 on the door but before she could touch it, it creaked
56 open...

61 They wouldn't find her here.

70 Slowly edging across the threshold, her heart began to
78 pound. Thoughts were racing wildly around her head
87 as she tentatively peered into the darkness, trying to
98 see if the coast was clear. After moments of silence and
107 stillness, she had reassured herself; judging by the state
116 of the house, nobody had ventured there in years.

117 Relief.

126 Then, from the floors above, a small, almost inaudible
130 voice called, "Help... me..."



Quick Questions



1. Where did the voice come from?



2. Define: inaudible.



3. Why was her 'heart pounding'? Give two reasons.



4. What do you predict Lucy will do next? Use the text to support your answer.

Section 1

Draw a number line starting at 54p and count on 9p.
What's the answer?

Section 2

Calculate the following in your head:

$25 + 5 =$

$48 + 3 =$

$76 + 7 =$

Section 3

Calculate:

$34 \times 10 =$

Section 4

A football club has 27 junior players and 53 adult players. How many people play at the club?

Section 5

Write the following numbers using digits:

One hundred and sixteen

Two hundred and forty-three.

Write the following numbers in words:

190

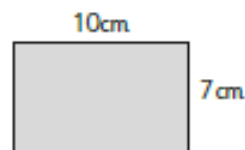
.....

381

.....

Section 6

Calculate the perimeter of these rectangles:



Section 7

What measurements are the arrows pointing to? Record the measurement to the nearest half cm.



A =

B =

C =

Section 8

There are 30 children in Year 3.

If 13 of them are girls, how many boys are there in Year 3?

Section 1

Draw a number line starting at 385g and count on 90g. What's the answer?

Section 2

Calculate the following in your head:

$268 + 7 =$

$187 + 4 =$

$653 + 9 =$

Section 3

Calculate:

$232 \times 10 =$

Section 4

A farmer has 276 sheep. 139 lambs are born in the spring. How many sheep are there now on the farm?

Section 5

Write the following numbers in digits in order from smallest to largest:

621

216

162

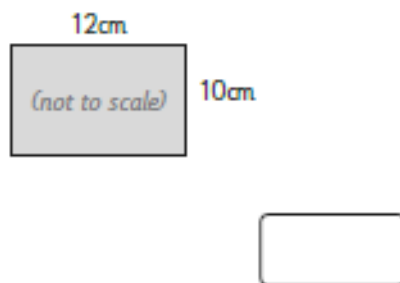
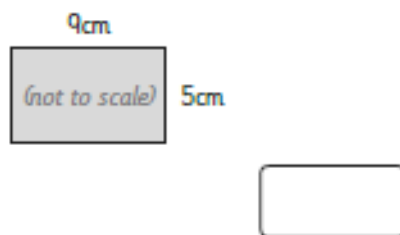
226

166

--	--	--	--	--

Section 6

Calculate the perimeter of these rectangles:



Section 7

What measurements are the arrows pointing to? Record the measurement to the nearest millimetre.



A =

B =

C =

Section 8

Here is a table showing the number of boys and girls in each year group:

	3A	3B	3C	Total
Boys	15	18	13	
Girls		12	15	42
Total	30		28	

Complete the table.

Section 1

Draw a number line starting at £6193, and count on £80. What's the answer?

Section 2

Calculate the following in your head:

$$\boxed{} + 6 = 802$$

$$\boxed{} + 8 = 243$$

$$\boxed{} + 9 = 793$$

Section 3

Calculate:

$$21 \times 100 =$$

Section 4

In one day, 5 492 vehicles cross a bridge going north, and 3 828 cross it going south. How many cars cross the bridge altogether?

Section 5

Write the following numbers in digits in order from smallest to largest:

2190

1902

9021

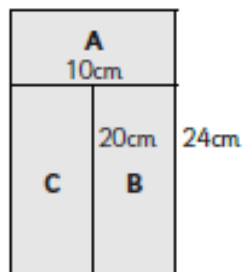
1290

2091

--	--	--	--	--

Section 6

Calculate the perimeter of these rectangles:



(not to scale)

A =

B =

C =

Section 7

Draw a rectangle with sides of: 2.1cm and 3.6cm

Section 8

Here is a table showing the number of pairs of shoes owned by six adults:

	Pairs of shoes
Sarah	6
Steve	12
Jenny	14
Adam	4
Hannah	10
Andy	8

Draw a vertical pictogram to show the results. Make each picture represent 2 pairs of shoes.