

Please find today's learning tasks below.

The table below explains the tasks and you will find the resources underneath. Your child will know which challenge they usually access in each subject and which task will be appropriate for them.

Year group: 3				Date: 1 st July			
		Bronze		Silver		Gold	
English		Sentence types- Today we would like you to understand the four types of sentences. Please use this link to watch the videos and complete the activities. https://www.bbc.co.uk/bitesize/articles/z7b3trd		Synonyms and antonyms- Today we would like you to understand what synonyms and antonyms are. Please follow the link and watch the videos. https://www.bbc.co.uk/bitesize/articles/zhwqmf Then complete the 3 activities on the BBC Bitesize website.			
Maths		Please read the scales using Kg and g to write the amounts shown by the arrows. Remember to work out you intervals to help you. Don't forget that 1Kg is 1000g.					
Reading/ Spelling		Please follow the link below to access online reading books. Please see the list of books for your child's reading band in their red book. https://www.oxfordowl.co.uk/ Please read at least 2 pages of a book and record it in the red school links book. <i>Can you write the common exception word 3 times? Please see the tables on the next pages. These are the words for this week. You could even test yourself on Friday. (new words will be given next Monday)</i> <i>We have attached some wordsearches for you to complete.</i>					

Unless otherwise specified, please complete the tasks in either your homework book or on a word document

Bronze- Spellings

Spelling	Write	Write	Write
climb			
most			
only			
both			
pretty			

Common Exception Words


m o s t e f t h i p k l
m n o p q r o t u r w x
o z a b c d l f g e i j
n l m g o l d r s t u v
l x y z l b c d t t g h
y j k l d n o p e y r t
u v w x y z a b a d e f
g h i j b r e a k p a r
o l d v w x y z a b t d
e f g h i j k l m n o p
q r s t e v e r y z a b
b o t h g h i j k l m n



most
only
both
old


cold
gold
told
every

great
break
steak
pretty



Silver/Gold- Spellings

Spelling	Write	Write	Write
guide			
heard			
heart			
height			
history			
increase			
knowledge			



February
strength
important
opposite
various

length
special
breathe
disappear
potatoes

English- Bronze

Sentence types

We would like you to watch the videos on the following link about the 4 types of sentences.

<https://www.bbc.co.uk/bitesize/articles/z7b3trd>

Then complete the activities on the website.

English- Silver/Gold

Synonyms and antonyms.

We would like you to understand synonyms and antonyms are. Please follow the link and watch the videos.

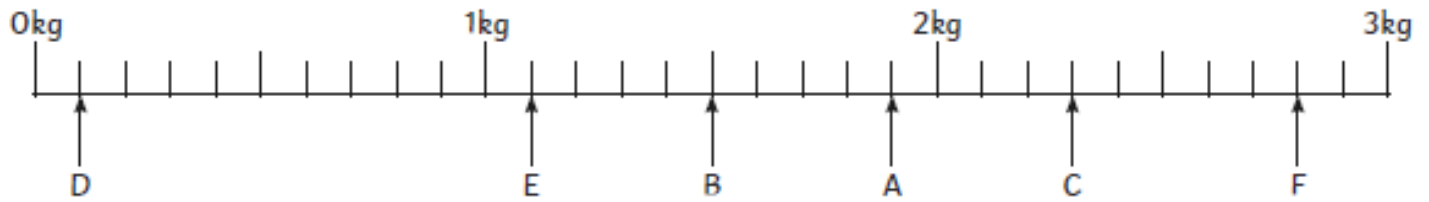
<https://www.bbc.co.uk/bitesize/articles/zhwgmfr>

Then complete the 3 activities on the BBC Bitesize website.

Maths- Bronze

- 1) For each scale, write the mass that is shown by each arrow in kg and g.
The first one has been done for you.

Scale 1:



Hint: There are 10 increments between 0 and 1kg (1000g).
Each increment is worth $1000g \div 10 = 100g$.

Arrows are pointing to:

A) 1kg 900g	D)
B)	E)
C)	F)

Scale 2:



Hint: There are 2 increments between 0 and 1kg (1000g).
Each increment is worth $1000g \div 2 = 500g$.

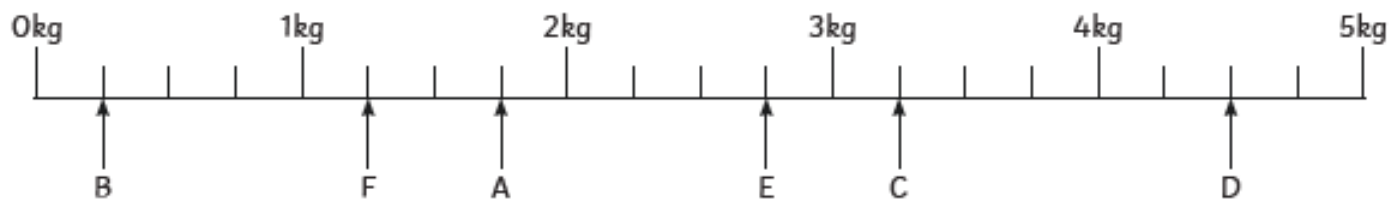
Arrows are pointing to:

A)	D)
B)	E)
C)	F)

Maths- Silver

- 1) For each scale, write the mass that is shown by each arrow in kg and g.
The first one has been done for you.

Scale 1:



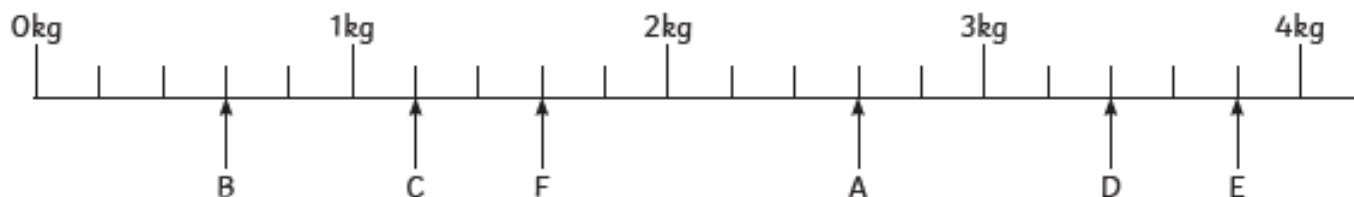
Hint: There are 4 increments between 0 and 1kg (1000g).

Each increment is worth $1000g \div 4 = \underline{\hspace{2cm}}$ g.

Arrows are pointing to:

A) <i>1kg 750g</i>	D)
B)	E)
C)	F)

Scale 2:



Hint: There are 5 increments between 0 and 1kg (1000g).

Each increment is worth $1000g \div 5 = \underline{\hspace{2cm}}$ g.

Arrows are pointing to:

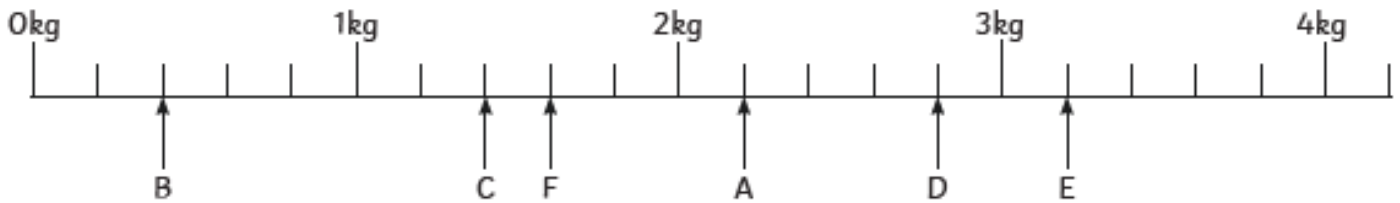
A)	D)
B)	E)
C)	F)

Maths- Gold

- 1) For each scale, write the mass that is shown by each arrow in kg and g.
The first one has been done for you.

Scale 1:

Before you begin, how much is each increment worth? Explain how you know.

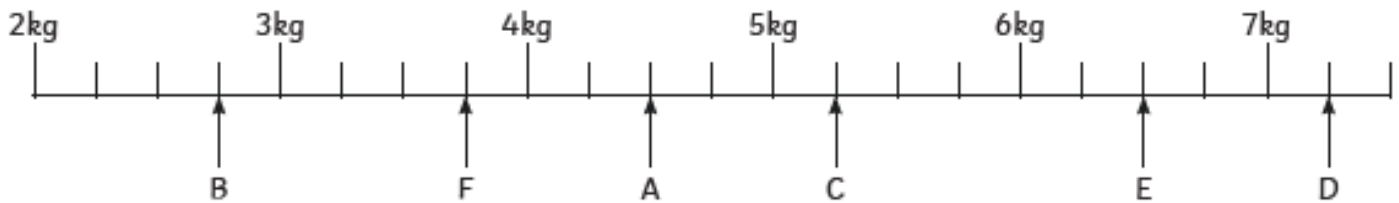


Arrows are pointing to:

A) <i>2kg 200g</i>	D)
B)	E)
C)	F)

Scale 2:

Before you begin, how much is each increment worth? Explain how you know.



Arrows are pointing to:

A)	D)
B)	E)
C)	F)